

Jolly Phonics Spellings 23rd – 27th March

Hello everyone, hope you are all keeping safe and well. On the next page you will find our Jolly Phonics Spellings for the next week. Again, you can try learning the spellings as we do at school at school (5 on Monday, 5 on Tuesday, 4 on Wednesday and 4 on Thursday) but if you prefer to do them a different way that's completely fine. Again you can write out the list of words in a copy/on a sheet, look up the meaning of any words you are unsure of in a dictionary and then practice the spellings by:

- 1) Looking at and saying each word out loud.
- 2) Tracing the word in the air with your finger
- 3) Practicing writing the word
- 4) Checking if you have written the word correctly

You could also practice the spellings again by putting the words in alphabetical order, putting each word in a sentence or you could even see if you could come with a short story with all 18 words included!

At the end of the week you can then ask someone to do a short test of the words with you by calling them out one by one while you try to write each word down.

Work It Out Week 24 23rd - 27th March

You will also find our Work It Out Activities For Week 24 on page 3 and 4. You can work on these across the week by writing out your answers to the questions on a separate sheet or in a spare copy. Again, you can bring this sheet or copy back to school with you when we return and we will go back through it together.

Mr. Gannon

‹-ery›

gallery
pottery
archery
lottery
bravery
slavery

butchery
scenery
bakery
delivery
imagery
discovery

surgery
nursery
treachery
stationery
confectionery
skulduggery

WEEK 24 – MONDAY

**T
A
B
L
E
S**

- $(10 \times 2) + 9 = \square$
- $(5 \times 2) + 7 = \square$
- $(3 \times 4) + 8 = \square$
- $(7 \times 2) + 7 = \square$
- $(8 \times 4) - 4 = \square$

Insert $>$, $<$ or $=$ to make the following true:

- $0.7 \square \frac{7}{10}$
- $4.6 \square 0.9$
- $2.5 \square 2\frac{1}{2}$
- $3.01 \square 3.1$
- $0.1 \square \frac{1}{10}$

11. Take 100 from the smallest number:
2413, 1143, 3210, 2816. \square

12. Tick the obtuse angle.



13. $\frac{2}{3}$ of €36 = \square

14. What is the value of the 3 in 4329? \square

15. $(12 \div 3) \times (15 \div 3) = \square$

16. 4 books cost €8.12. How much for 8 books?
 a €16.24 b €32.48 c €12.24

17. One bag of flour weighs 450 g. How much less than 1 kg would two bags weigh?
 a 550 g b 100 g c 200 g

18. How much change would I get from €10 if I bought a packet of markers for €4.25 and a pen for €2.75? a €2.00 b €2.50 c €3.00

19. How many 250 ml cups of milk could be filled from a jug of 2 l 250 ml? a 7 b 8 c 9

20. 9 pencils cost €2.25. How much for 4?
 a €1.50 b €1.00 c €0.75



Score

20

Work it out

WEEK 24 – TUESDAY

**T
A
B
L
E
S**

- $(\square \div 2) + 4 = 5$
- $(\square \div 4) + 7 = 16$
- $(\square \div 4) + 8 = 14$
- $(\square \div 4) + 7 = 10$
- $(\square \div 4) + 3 = 8$

6. €12.50 + €9.50 = \square

7. How many metres in 1.5 km? \square

8. $(20 \div 4) \times (30 \div 6) = \square$

9. $2000 + 550 + 30 = \square$

10. What is double 59? \square

11. How many tens in 400? \square

12. How many centimetres in $\frac{1}{4}$ of a metre?
 \square

13. $(6 \times 3) + (7 \times 0) = \square$

14. What is the cost of 4 kg of plums at €2.50 per kg? \square

15. Write in figures: three thousand and seven.
 \square

16. Pamela uses 1 kg of flour to make 24 buns. How many buns could she make with 4 kg of flour? a 48 b 72 c 96

17. 2 bottles of cola cost €2.80. How much for 8 bottles? a €5.00 b €8.40 c €11.20

18. What decimal fraction of the circle is shaded? a $\frac{1}{2}$ b $\frac{4}{10}$ c $\frac{1}{4}$



19. Sam swims for 45 mins three times a week. How many hours and minutes does she spend swimming each week? a 1 hr 35 mins b 2 hrs 15 mins c 2 hrs 30 mins

20. What is the next number? 4, 7, 11, 16, 22, \square
 a 29 b 30 c 31





Score

20

WEEK 24 – WEDNESDAY

**T
A
B
L
E
S**

- $(\square \times 2) - 3 = 9$
- $(\square \times 4) - 8 = 20$
- $(16 \div 4) - \square = 3$
- $(20 \div 4) - \square = 4$
- $(36 \div 4) - \square = 3$
- It takes 45 l to fill a car tank. How many litres would it take to fill 4 similar tanks?
- $10 \times 25 \text{ m} = \square$
- Fill in the missing number.
1224, 1230, 1236, , 1248
- The area of a rectangle 9 cm x 5 cm =
- What is the area of this square?  5 cm
- $\text{€}20 + (\frac{3}{5} \text{ of } \text{€}20) = \square$
- Which one of these letters is symmetrical:
F, G, H, L, P?
- $\frac{1}{5} \text{ of } \square = 24$

- 5 books cost €5.50. How much for two books? 
- What is the area of a rectangle 8 cm long by 6 cm wide?
- $\frac{3}{8}$ of a number is 15. What is the number?
 a 30 b 35 c 40
- How many seconds in $2\frac{1}{2}$ minutes?
 a 150 b 130 c 120
- How much less than 2 litres of milk is in two jugs each holding 450 ml?
 a 90 ml b 110 ml c 1 l 100 ml
- 5 ice-cream cones cost €5.50. What would 10 cones cost? a €10 b €11 c €12
- Take 49 from half of 144.
 a 21 b 22 c 23




Score

20

Work it out. 

WEEK 24 – THURSDAY

**T
A
B
L
E
S**

- $(4 \times \square) + 6 = 30$
- $(4 \times \square) + 4 = 32$
- $(4 \times \square) - 8 = 8$
- $(4 \times \square) - 7 = 5$
- $(\square \div 4) + 7 = 8$
- How much is 0.1 of €100?
- What must be added to 1.8 to make 2?
- 3 pencils cost 30c. How many pencils could I buy for €1.20?
- $(4 \times 7) - (32 \div 8) = \square$
- How many minutes from 6:25 to 7:05?
- $\frac{1}{8} \text{ of } 72 + \square = 21$
- What is the perimeter of this regular hexagon?  9 cm
- Take $\frac{1}{4}$ of 36 from half of 24.

- How many millilitres in $\frac{3}{4}$ of a litre?
- If 3 pens cost 45c, how much for 9?
- How much heavier is 2 kg than 3 tins of 400 g each? a 600 g b 700 g c 800 g
- $(63 \div 7) + (6 \times 6) = \square$
 a 45 b 50 c 55
- What is the area of a garden 9 m long by 5 m wide? a 28 m^2 b 45 m^2 c 36 m^2
- Ann's skipping rope was 1 m 80 cm long. Sue's rope was 24 cm longer. How long was Sue's rope?
 a 2 m 04 cm b 2 m 40 cm c 2 m 34 cm
- By how much is the sum of 45 and 15 greater than their difference?
 a 20 b 30 c 40



Score

20